



PROFESSOR

Eulália Santos

DISCIPLINA

MATEMÁTICA

TURMA

101

ALUNO



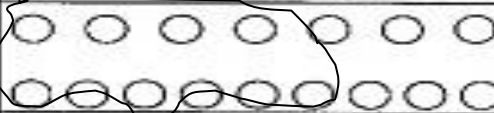
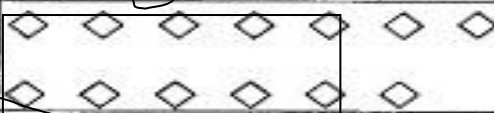
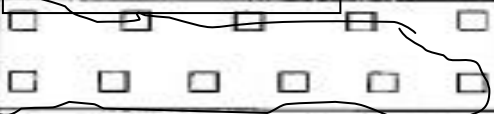

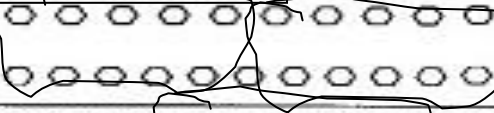

GABARITO**COLÉGIO MARQUES RODRIGUES**Estrada da Água Branca, 2551 - Realengo - RJ
Tel: (21) 3462-7520 - www.colegiomr.com.br**Questão 1:**

Desenhar 8 peixes / 7 bolas / 6 beias.

Questão 2

D	U
3	6
2	7
3	8
1	0
2	5

Questão 3:

 FIGURAS	QUANTOS GRUPOS DE 10?	QUANTOS ELEMENTOS SOBRARAM?
	1	5
	1	6
	1	3
	1	1
	1	7
	2	1
	2	7

Questão 4:

Desenhar 8 maçãs / 9 flores / 7 balões.

Questão 5:

12

Questão 6:

Pitar 12 laranjas


Questão 7:

Sebraram 8 laranjas.

Questão 8:

01 04 05 06 08 09 12 14 15 17

Questão 9:



Questão 10:

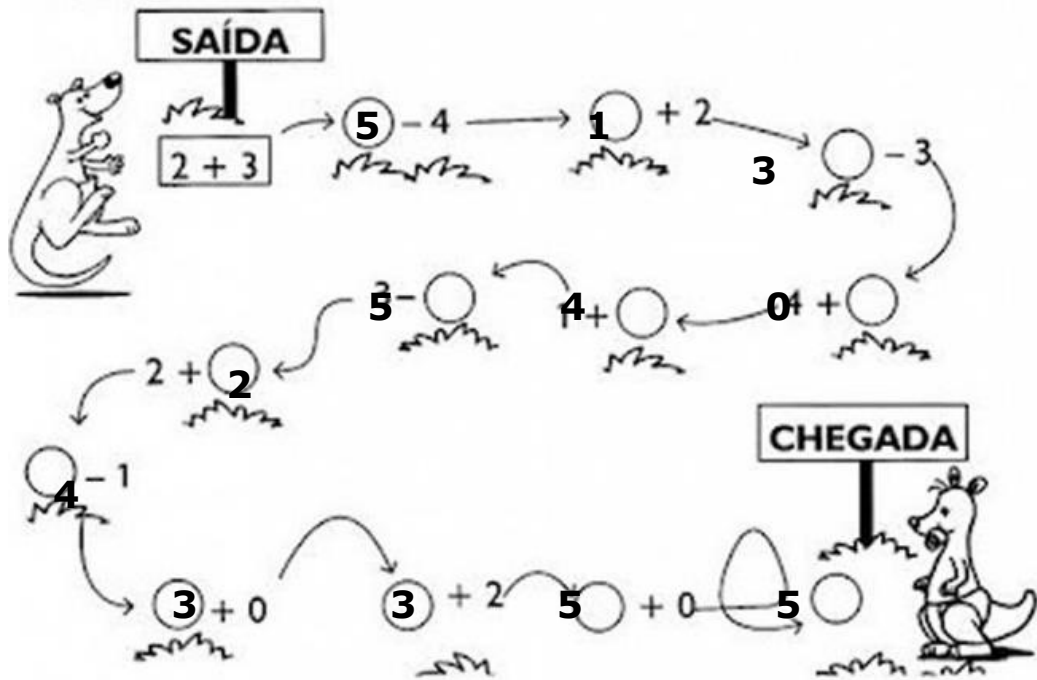
+ 2	
2	4
3	5
1	3
0	2

- 1	
5	4
3	2
4	3
2	1

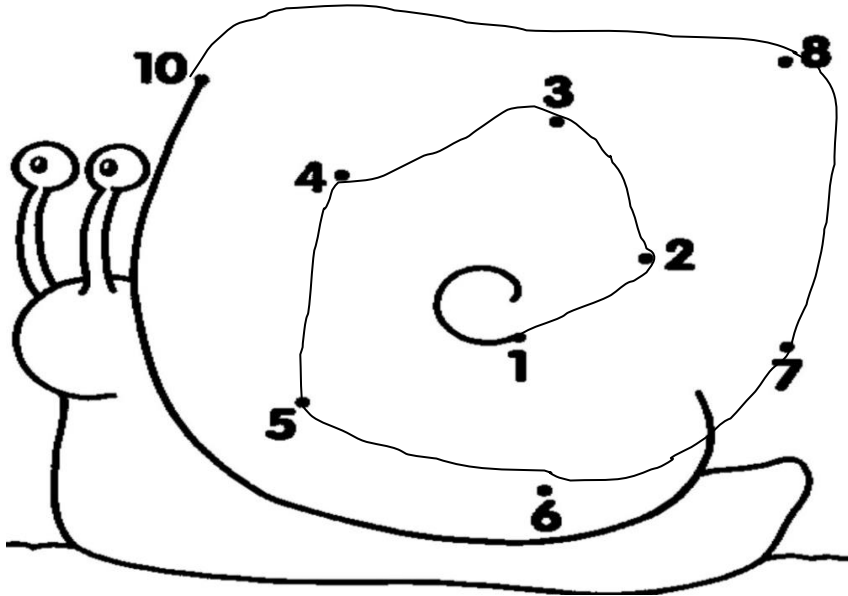
+ 3	
0	3
1	4
2	5
3	6



Questão 11:



Questão 12:



Questão 13

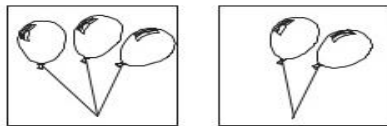
Fazer a continuação das sequências até terminar os espaços.

Questão 14:

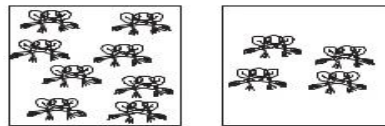
CONTE OS DESENHOS

+	+	+
+	+	+
=	=	=
<input type="text" value="8"/>	<input type="text" value="6"/>	<input type="text" value="7"/>


Questão 15:



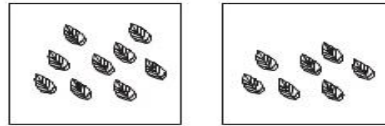
$$3 - 1 = \boxed{2}$$



$$8 - 4 = \boxed{4}$$



$$4 - 3 = \boxed{1}$$



$$9 - 2 = \boxed{7}$$

Questão 16:

4 / 7 / 9 / 6 / 5 / 7 / 3 / 0 / 0 / 1 / 4 / 5

Questão 17:

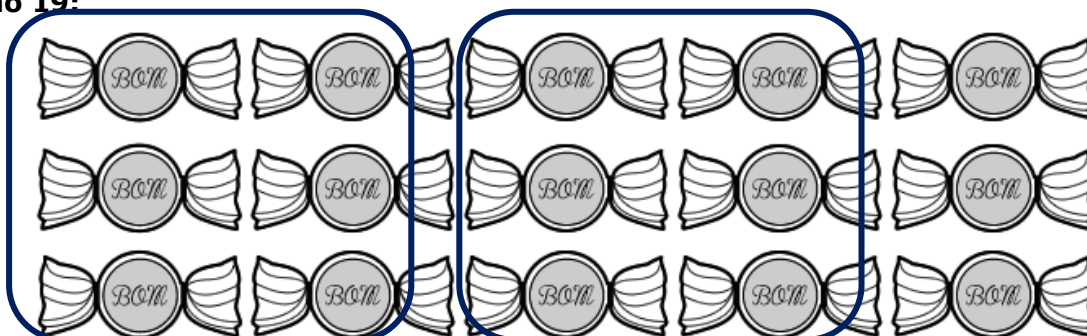
Pintar a laranja, a banana e os ovos.

Questão 18:

HÁ 6 PÃES OU
Meia DÚZIA DE PÃES

HÁ 12 PÃES OU
Uma DÚZIA DE PÃES

Questão 19:



Questão 20:

2 grupos. / Sim / Debram 3 bombons