



PROFESSOR

**Eulália Santos**

DISCIPLINA

**GEOGRAFIA**

TURMA

**101**

ALUNO

GABARITO

## COLÉGIO MARQUES RODRIGUES

Estrada da Água Branca, 2551 – Realengo – RJ  
Tel: (21) 3462-7520 – www.colegiomr.com.br

**Questão 1:**


cama – mesa – geladeira – sofá

**Questão 2:**


Pintar o sofá e circular o fogão

**Questão 3:**

Circular.



**Questão 4:**



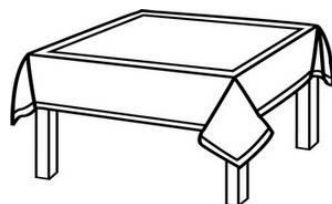
**Questão 5:**

cama

**Questão 6:**



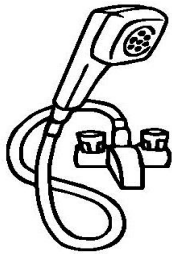
fogão



mesa

**Questão 7:**

Pintar de marrom



**Questão 8:**

O aluno deve ligar os pontos de número 1 até o número 32




**Questão 9:**

uma casa


**Questão 10:**

- a) Resposta pessoal
- b) fogão
- c) cama

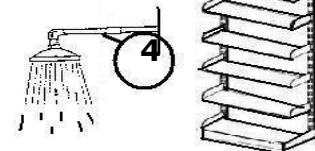
**Questão 11:**



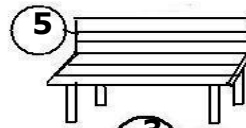
1-QUARTO



2-SALA



3-COZINHA



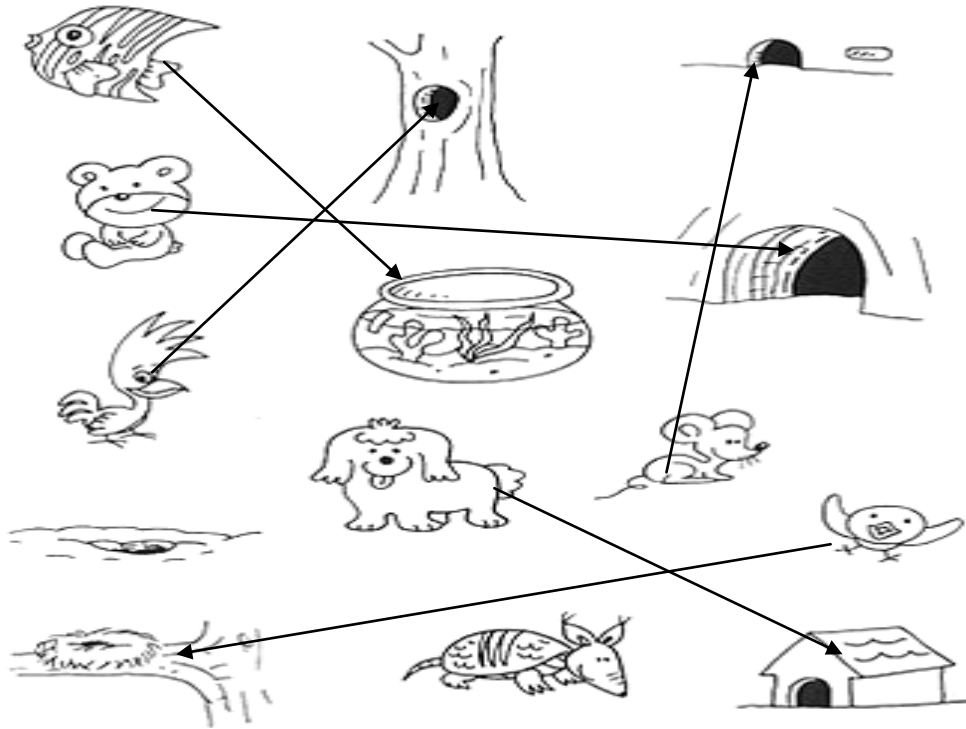
4-BANHEIRO




5-VARANDA



**Questão 12:**



**Questão 13:**



**Questão 14:**

**Colocar bolinhas nestas duas frases.**

*Devemos manter as janelas abertas.*

*Nessa casa tem ser varrida diariamente.*

**Questão 15:**

*Resposta pessoal de aluno.*

**Questão 16:**

*Resposta pessoal de aluno.*

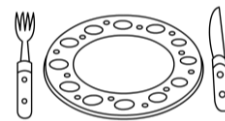
**Questão 17:**

*Resposta pessoal de aluno.*

**Questão 18:**

*Visitas / pia*

**Questão 19:**



**Questão 20:**

*O aluno deve criar uma frase para cada imagem representada*